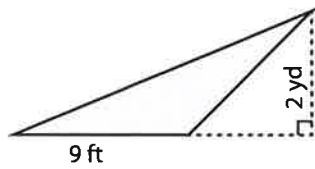


Triangle - Area

CS1

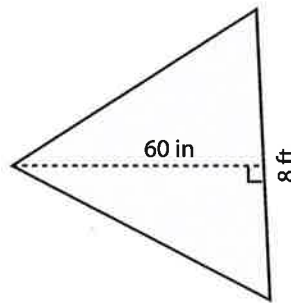
Find the area of each triangle.

1)



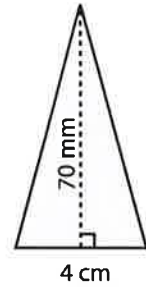
Area = _____ yd²

2)



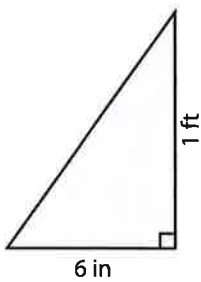
Area = _____ ft²

3)



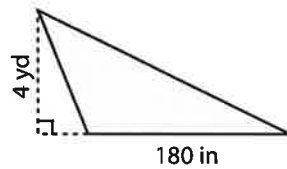
Area = _____ cm²

4)



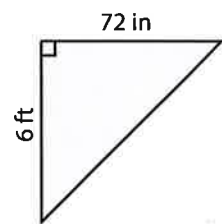
Area = _____ in²

5)



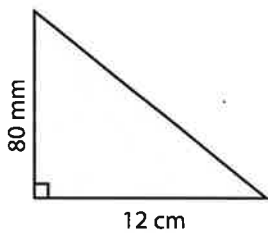
Area = _____ yd²

6)



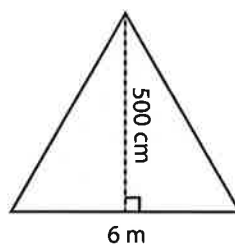
Area = _____ ft²

7)



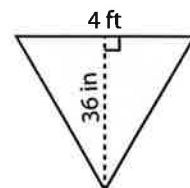
Area = _____ cm²

8)



Area = _____ m²

9)



Area = _____ ft²